



Wednesday

- $$\begin{array}{r} \text{t u} \\ 26 \\ + 49 \\ \hline \end{array}$$

Remember to carry
- 72 take away 6 = 66
- Represent 683 on the abacus.

h	t	u
6	8	3
- Draw hands on the clock to show $\frac{1}{4}$ to 12.
 
- $2 \times 8 = 16$ double 8
- $16 + 4 = 20$ 20
- Is a bicycle lighter or heavier than 1kg? lighter (1kg is a bag of sugar)
- $400 + 6 + 70 = 476$ $400 + 70 = 470$, $470 + 6 = 476$
- Plot the data on the graph.


football: 4, swimming: 3, dancing: 1, basketball: 2






- $4 \times 5 = 20$ 6 groups of 5
- $2\text{kg } 200\text{g} + 1\text{kg } 100\text{g} = 3\text{kg } 300\text{g}$
- $18 \div 2 = 9$ half 18 + 1kg
- What must I add to 60c to make €1? €1 = 100c
- If Laura had 38 more marbles, she would have as many as Ollie who has 186. How many marbles has Laura? 38
- Half the distance between two towns is 34km. What is the total distance? double 34
- A football match started at **7:30**. It finished ninety minutes later. At what time did it finish? 8:30

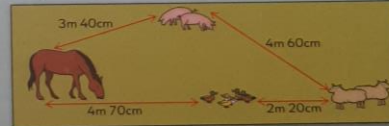
90 mins = 1 hour 30 mins /16
 $7:30 + 1\text{hour} = 8:30 + 30\text{mins} = 9:00$

Thursday

- 46 plus 9 = 55 $\begin{array}{r} 46 \\ + 9 \\ \hline 55 \end{array}$ Remember to carry
- $26 - 7 = 19$
- $300 + 4 + 50 = 354$ $300 + 50 = 350$, $350 + 4 = 354$
- $14 \div 2 = 7$ half 14
- 8:30** = 8 past 30
- 1kg = 1000 g
- Is an elephant lighter or heavier than 1kg? heavier (1kg = a bag of sugar)
- How long is the pencil? 10cm

- Which shape is $\frac{1}{4}$ coloured? (c)

(a)  $\frac{1}{8}$ (b)  $\frac{3}{8}$ (c)  $\frac{2}{8}$
- Which is greater, $\frac{1}{2}$ l or 750ml? $\frac{1}{2}$ l ($\frac{1}{2}$ l = 500ml)
- $3 \times 4 = 12$ 3 groups of 4
- How many faces has a cube? 6 Think of a dice

Map of farm



- How far is it from the pigs to the ducks? Choose the shortest way. 4m 60cm + 2m 20cm
- How far is it from the horse to the sheep? Choose the shortest way. 4m 70cm + 2m 20cm
- How far is it from the sheep to the horse? Choose the longest way. 4m 60cm + 3m 40cm
- What is the difference between the longest and shortest ways? 8m 00cm - 6m 70cm

See page 77 for test.