





## Week 14 Test

- $90 + 100 + 0.8 + 0.06 = 190.86$
- $7 - 2.35 = 4.65$
- Share €75 among 5 people.  
Each person gets €15.
- $(6 \times 7) - 3 = 39$
- 3 minutes to midday = 11:57
- 11, 12, 14, 17, 21, 26, 32
- 7 hours 34 minutes subtract  
3 hours 35 minutes = 3:59
- 6kg < 4.5kg + 2,200g (<, > or =)
- What are the missing factors of 28?  
1, 2, 4, 7, 14, 28
- Round 9.75 correct to  
one decimal place. 9.8
- 0.1 of my money is €4. How much  
money have I altogether? 40
- Does an orange weigh  
100g or 100kg? 100g 
- $$\begin{array}{r} 28 \\ \times 7 \\ \hline 196 \end{array}$$
- $47 \times 10 = 470$
- $\frac{4}{9}$  of 54 = 24
- Which side of the  
balance will tip down?  
a 
- Write the largest number that can  
be made using all these digits:  
5 1 8 4. 8,541
- Is C symmetrical? Yes 
- This is the net  
of a cylinder. 
- Circle the number nearest to 2,000.  
2,102 1,990

## Problems

- Skateboard safety gear costs the following:  
helmet €22.20, gum shield €8.50,  
wrist guard (per pair) €5.90, shin pads (per pair) €10.95.  
How much will I have to pay if I buy all the skateboard safety gear? 47.55
- Paddy weighs 650g of flour for baking. If he needs 1.4kg of flour,  
how much more flour must he pour onto the scales? 750g
- What must be added to the product of 35 and 27 to make 1,200? 255
- Pat cycled 4km 25m. Joe cycled 750m further than that.  
How far did Joe cycle? 4.775km
- I am a stamp collector. I put  $\frac{5}{12}$  of my stamps into one stamp collection book  
that holds 75 stamps. How many stamps have I in my full collection? 180