



Master Your Maths Miss Finglas Hints For Week 13 Monday/Tuesday





Week 13

Monday

- 6 more than 72 = $\frac{72}{+6}$
- $$\begin{array}{r} t\ u \\ 43 \\ -25 \\ \hline \end{array}$$
Don't forget to borrow
- $2 \times 5 =$ Groups of
- $\frac{1}{4}$ of 12 = Half it, Half it again
- $325 =$ hundreds + tens + units
- $155c = \text{€} \cdot$
- Share 30 bananas equally among 6 monkeys. $30 \div 6 =$ Each monkey gets bananas.
- How many sides has a hexagon? 
- Write 10 past 5 in digital time. $\text{Hrs} \text{ Min} \text{ Past}$
- $450\text{ml} -$ = 200ml $\frac{450\text{ml}}{-200\text{ml}}$
- Which is heavier, $\frac{1}{4}\text{kg}$ or 350g ? $1\text{kg} = 1000\text{g}$, $\frac{1}{4}\text{kg} = 250\text{g}$, $\frac{1}{2}\text{kg} = 500\text{g}$
- 6, 9, , , 18, $+3$
- What is the difference between 35 and 49? $49 - 35$
- What is the sum of 125 and 56? $125 + 56$
- Mummy had €1. She spent 25c on sweets and 55c on crisps. How much money has she left? $\text{€}1.00 - 25c - 55c$ 
- Find the cost of 2 litres of diesel at a cost of €1.55 per litre. $2 \times \text{€}1.55 = \text{€}3.10$

$30 + \text{€}1.55 = \text{€}4.55$ /16

Tuesday

- $$\begin{array}{r} h\ t\ u \\ 132 \\ +58 \\ \hline \end{array}$$
Don't forget to carry
- $20 -$ = 12 *Count on from 12 to 20*
- $2 \times 6 =$ *Groups of*
- What fraction of the circle is shaded?  $\frac{3}{8}$
- $22 \div 2 =$ *Share between*
- Adam measured the weight of his schoolbag. Did he measure in kilogrammes or kilometres? 
- $\text{€}2.45 =$ c *What is the worth?*
- What is the value of the underlined digit in 678: 600, 60 or 6? 6
- Draw hands on the clock to show twenty-five to twelve. 
- 60, 55, , , 40, -5
- Which is less, 700ml or $\frac{3}{4}\text{l}$? $\frac{1}{4}\text{l} = 250\text{ml}$
- Draw two lines of symmetry. 

Basketball tournament 1 basket = 2 points

Team A = 9 baskets, Team B = 30 points, Team C = 12 baskets, Team D = 28 points

- How many points did Team A score? $9 \times 2 = 18$
- How many points did Team C score? $12 \times 2 = 24$
- How many more points did Team B score than Team A? $30 - 18 = 12$
- How many less points did Team C score than Team D? $28 - 24 = 4$

/16