


Monday

- 43 plus 30 =
- $$\begin{array}{r} \text{€}237 \\ + \text{€}125 \\ \hline \end{array}$$
- $8 \times 4 = \text{ } \quad 8+8+8+8=$
- $36 - 6 - 6 - 6 - 6 = \text{ } \quad \begin{array}{c} 20 \quad 24 \quad 18 \quad 6 \\ \hline \end{array}$
- $7 + 60 + 800 = \text{ } \quad \begin{array}{c} 7 \\ \hline \end{array}$
- Colour  $\frac{1}{8}$  of the leaves.
 


- 12, 18, , 30, 


$\downarrow$   $\downarrow$   $\downarrow$   $\downarrow$
- 5 groups of 6 =   
e.g. 5 bags with 6 sweets in each
- $7805 - 350 = \text{ } \quad \begin{array}{r} 7805 \\ - 350 \\ \hline \end{array}$
- is  $\frac{1}{4}$  of 12.
 

xxx	xxx
xxx	xxx


1 box out of 4.
- How many minutes between **2:10** and **2:30**?
- $15 \div 3 = \text{ } \quad \begin{array}{r} 15 \\ \div 3 \\ \hline \end{array}$   
15 sweets shared between 3 girls
- Tom had 305 stamps.  $305 - 243 = \text{ } \quad \begin{array}{r} 305 \\ - 243 \\ \hline \end{array}$   
He gave 243 to Kathleen.  
How many stamps had he left?
- 24 cars qualified for the final of a race. They were lined up in 2 equal rows. How many cars were there in each row?   
 $24 \div 2 = 12$  cars shared between 2 rows
- There are 6 panes of glass in each window. How many panes in 5 windows? 


1 window
- How many lengths of string, each 50cm long, can be cut from a piece of string measuring 4m long?   
 $100\text{cm} = 1\text{m} \quad 200\text{cm} = 2\text{m} \quad 300\text{cm} = 3\text{m}$   
 $4\text{m} = 400\text{cm}$

- $16c + \text{ } = 30c \quad \begin{array}{r} 30c \\ - 16c \\ \hline \end{array}$
- 50c take away 15c =   $\begin{array}{r} 50 \\ - 15 \\ \hline \end{array}$
- $10 \times 4 = \text{ } \quad 10+10+10+10=$
- Write the number that is 10 more than 645.   $\begin{array}{r} 645 \\ + 10 \\ \hline \end{array}$
- Seven fours =   $7 \times 4 = 7+7+7+7=$
- Colour  $\frac{1}{8}$  of the marbles.
 


- 18, 21, , 27, 

$\uparrow$   $\uparrow$   $\uparrow$   $\uparrow$
- $\frac{1}{8} + \text{ } = 1 \quad \frac{1}{8} + \frac{7}{8} = \frac{8}{8} = 1$
- How many minutes are there from **3:40** to **4:00**?
- $300\text{g} + 250\text{g} + \text{ } = 1\text{kg} \quad \begin{array}{r} 300\text{g} + 250\text{g} + \text{ } \\ \hline = 1,000\text{g} \end{array}$
- How many surfaces has a cone? 


- $32 \div 8 = \text{ } \quad \begin{array}{r} 32 \\ \div 8 \\ \hline \end{array}$   
32 sweets shared between 8 boys

**Football** 1 goal = 3 points

**Team A:** 2 goals + 9 points  $\begin{array}{c} 6 \text{ points} \\ + 9 \text{ points} \end{array}$

**Team B:** 16 points

**Team C:** 1 goal + 14 points  $\begin{array}{c} 3 \text{ points} \\ + 14 \text{ points} \\ \hline 17 \text{ points} \end{array}$

**Team D:** 3 goals + 12 points  $\begin{array}{c} 9 \text{ points} \\ + 12 \text{ points} \\ \hline 21 \text{ points} \end{array}$

- What is Team A's score in points?
- What is Team C's score in points?
- What is Team D's score in points?
- What is the difference in points between Team B and Team D?