








- 6 more than 72 =  $72 + 6$
- $\begin{array}{r} t\ u \\ 4\ 3 \\ -2\ 5 \\ \hline \end{array}$  Borrow!
- $2 \times 5 =$   $\square$  2 groups of 5
- $\frac{1}{4}$  of 12 =  $\square$   $12 \div 4 =$   $\square$
- 325 =  $\square$  hundreds +  $\square$  tens +  $\square$  units
- 155c = €  $\square$   $100\ c = \text{€}1$
- Share 30 bananas equally among 6 monkeys. Each monkey gets  $\square$  bananas.  $30 \div 6 =$   $\square$
- How many sides has a hexagon?  $\square$  
- Write 10 past 5 in digital time.  $\square$  
- $450\text{ml} - \square = 200\text{ml}$   $\begin{array}{r} 450 \\ -200 \\ \hline \end{array}$
- Which is heavier,  $\frac{1}{4}\text{kg}$  or 350g?  $\square$   $1000\text{g} = 1\text{kg}$
- 6, 9,  $\square$ ,  $\square$ , 18,  $\square$
- What is the difference between 35 and 49?  $\square$   $\begin{array}{r} 49 \\ -35 \\ \hline \end{array}$
- What is the sum of 125 and 56?  $\square$   $\begin{array}{r} 125 \\ +56 \\ \hline \end{array}$
- Mummy had €1. She spent 25c on sweets and 55c on crisps. How much money has she left?  $\square$   $\begin{array}{r} 100 \\ -25 \\ -55 \\ \hline \end{array}$  
- Find the cost of 2 litres of diesel at a cost of €1.55 per litre.  $\square$

- $\begin{array}{r} h\ t\ u \\ 1\ 3\ 2 \\ +5\ 8 \\ \hline \end{array}$
- $20 - \square = 12$   $\begin{array}{r} 20 \\ -12 \\ \hline \end{array}$
- $2 \times 6 =$   $\square$  2 groups of 6
- What fraction of the circle is shaded?  $\frac{\square}{8}$  
- $22 \div 2 =$   $\square$  half
-  Adam measured the weight of his schoolbag. Did he measure in kilogrammes or kilometres?  $\square$
- €2.45 =  $\square$  c  $100\ c = \text{€}1$
- What is the value of the underlined digit in 678: 600, 60 or 6?  $\square$
- Draw hands on the clock to show twenty-five to twelve. 
- 60, 55,  $\square$ ,  $\square$ , 40,  $\square$
- Which is less, 700ml or  $\frac{3}{4}\text{l}$ ?  $\square$   $\frac{1000\text{ml}}{4} = 250$
- Draw two lines of symmetry.  half.

**Basketball tournament** 1 basket = 2 points

Team A = 9 baskets, Team B = 30 points,  
Team C = 12 baskets, Team D = 28 points

- How many points did Team A score?  $2 \times 9 =$   $\square$
- How many points did Team C score?  $2 \times 12 =$   $\square$   $A = 18$
- How many more points did Team B score than Team A?  $30 - 18 =$   $\square$   $B = 30$
- How many less points did Team C score than Team D?  $28 - 18 =$   $\square$   $C = 24$ ,  $D = 28$