




Wednesday


- What do you do to find the product of 2 numbers? add, subtract, multiply, divide
- $(7 \times 9) - 5 =$ 63 - 5 = 58
7 x 9 = 63
- What is the perimeter of a regular octagon with 8cm sides? 8 x 8 = 64
- $1l - 870ml =$ 130ml
1000 - 870 = 130
- How many thirds in 3? 9
There are 3 thirds in 1
- Write the answer as a decimal fraction:
 $\frac{20}{100} = \frac{2}{10} + \frac{20}{100} = 0.20$
- $0.8 + 0.7 =$ 1.5
0.8 + 0.7 = 1.5
Think money
- Is 648 evenly divisible by 4? Yes
- Count the money. €1.20
Are there remainders?

- Draw the reflection of: Z
mirror
- An octagon has 0 pairs of parallel lines.
Parallel lines never meet

- $750, 725, 700, \underline{675}, 650, \underline{625}$
- Three tickets for a certain journey cost €36.60. What is the cost of 8 tickets? €99.60
3 x 36.60 = 122.80
- Mum has 1.65 litres of orange to share among 6 children. How many millilitres can each child have? 275ml
Don't worry too much here
1.65 / 6 = 0.275
- $\frac{5}{8}$ of the total fruit in a basket are pears, $\frac{1}{4}$ are apples and the rest are 10 oranges. How many pieces of fruit are in the basket? 40
10 x 8 = 80
- A bag of potatoes weighed 4.5kg. John took 900g of potatoes from the bag for dinner. What weight of potatoes are left in the bag? 3.6kg
4.5 - 0.9 = 3.6

/16

Thursday

- $1l - 110ml =$ 890ml
1000 - 110 = 890
- How many ninths in 3? 27
9 x 3 = 27
- Write the answer as a decimal fraction:
 $1\frac{98}{100} = 1 + \frac{98}{100} = 1.98$
- What do you do if you want to share an amount of money between 2 people? divide
(add, subtract, multiply, divide)
- $(8 \times 7) - 9 =$ 47
8 x 7 = 56
56 - 9 = 47
- $98 \times 10 =$ 980
ten times bigger
- Draw the reflection of: mirror

- What type of triangle has 3 equal sides? Equilateral
- $500, 475, 450, \underline{425}, \underline{400}$
- $0.5 + 0.6 =$ 1.1
0.5 + 0.6 = 1.1
- Is 731 evenly divisible by 8? No
Is there a remainder?
- $€3.47 + €4.30 =$ €7.77
3.47 + 4.30 = 7.77

Four children Amy, Brian, Carla and Denis go to the cinema.

- Amy is not sitting beside Brian.
- The boys want to sit together. 
- Carla is sitting beside Brian.
- Denis is sitting between a girl and a boy.
- Amy is sitting in a seat to the far left.

Fill in the seats below using the information above.

13.	14.	15.	16.
<input type="text"/>	<input type="text"/>	<input type="text"/>	<input type="text"/>

/16

See page 77 for test.