

Monday

1.
$$\begin{array}{r} \text{h t u} \\ 465 \\ + 187 \\ \hline \end{array}$$
 Carry
652

2. Two hundred + seven hundred + eighty = 980

3. 122 minutes = 2 hours ^{1 hr = 60 mins}
2 minutes ^{2 hr = 120 mins}

4. $9 + 9 + 9 \rightarrow$ 3 $\times 9 =$ 27

5. Draw the other half of the letter E.



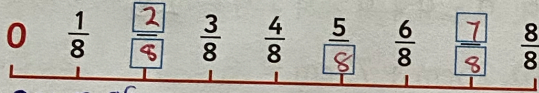
6. Name this shape.

Cone



7. $36 - 9 - 9 - 9 =$ 9

8. Write the missing numbers on the numberline.



9. $3 \times 3 =$ 9

10. $560\text{ml} - 240\text{ml} =$ 320ml ^{560ml}
320ml ^{- 240ml}

11.
$$\begin{array}{r} €6.50 \\ - €4.65 \\ \hline \end{array}$$
 Don't forget to borrow
€1.85

12. $6 \div 3 =$ 2 ^{shared equally between.}

13. Eoin had 234 marbles. Kian had ²³⁴ 59 less than Eoin. How many marbles had Kian? 175

14. Ciara has saved €3.45. ^{€5.00} How much more does she need to buy the t-shirt? €1.55



15. School starts at 9:20. Helen was 30 minutes late. At what time did she arrive? 9:50 ^(add 30 mins)

16. How many legs have 6 elephants and 4 monkeys altogether? 32 ^{(6x4)=24}
^{(4x2)=8}

Tuesday

1.
$$\begin{array}{r} \text{h t u} \\ 5643 \\ - 576 \\ \hline \end{array}$$
 Don't forget to borrow
067

2. $35\text{cm} + 100\text{cm} =$ 135cm ^{+ 100}
35

3. Tick the most likely event.


It will rain tomorrow.

The trees will turn blue tomorrow.

4. Write quarter to three in digital time. 2:45 ^{It's not 3 yet!}

5. $4 \times 3 =$ 12 ^{groups} ^{hrs mins Past}

6. What fraction is not shaded? 4/10



7. Divide these hats into three equal groups.

$9 \div 3 =$ 3

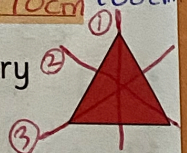


8. Arrange these fractions in order of size, starting with the smallest:

$\frac{5}{8}, \frac{3}{8}, \frac{1}{2}$ $\frac{3}{8}$, $\frac{1}{2}$, $\frac{5}{8}$

9. 30cm less than 1 metre = 70cm ^{1m = 100cm}

10. How many lines of symmetry has this triangle? 3



11. $\frac{1}{4}$ of 8 = 2 ^{$\frac{1}{4} \times 8 = 2$}

12. $900\text{g} - 250\text{g} =$ 650g ^{900g}
250g

Television guide

10:00 Cartoon Time	11:10 Film: The Green Giant
10:30 News and Weather	12:30 Quiz Time

13. How long is Cartoon Time? 30 mins ^{10:00 → 10:30}

14. How long is News and Weather? 40 mins ^{10:30 → 11:10}

15. How long is the film? 80 mins ^{or 1hr 20mins} ^{11:10 - 12:30}

16. If Quiz Time lasts for 45 minutes, at what time does it finish? 1:15 ^{12:30 + 45 mins =}