

Wednesday

1.
$$\begin{array}{r} \text{h t u} \\ 499 \\ + 250 \\ \hline \end{array}$$
 * Carry where you need to.

2. $300 + 200 + 60 + 5 =$ 300 200 60 5

3. $5 \times 10 =$ 50


4. $159c = \text{€}$ 1.59 $100c = \text{€} 1.$

5. $9 + 9 + 9 + 9 + 9 \rightarrow$ 5 $\times 9 =$ 45

6. I have 1 curved face and 1 flat face. I am a C.

7. What time is 10 minutes earlier than 9:40? 8:30 go back

8. $7 \times 3 =$ 21 groups

9. Is this angle greater than or less than a right angle? less than 

10. Divide 18 cars equally among 3 boys. $18 \div 3 =$ 6

11. $6, 15, 24,$ 33, 42, 51

12. $3 \times 250\text{ml} < 700\text{ml}.$ True or false? True less than
$$\begin{array}{r} 250 \\ 250 \\ + 250 \\ \hline \end{array}$$

13. There are 40 grapes in a bag. Lynn eats $\frac{1}{2}$ of them. How many are left? 20 a) $\frac{1}{2}$ of 40. b) $40 - \text{ans. (a)}$

14. What change did Frank get from €5 when he bought a book for €3.50 and a toy for €1.25? 0.25 a) $\text{€}3.50 + \text{€}1.25$ b) $\text{€}5.00 - \text{Ans. a}$

15. A school has 3 classes with 31, 24 and 22 pupils. How many pupils are in the school? 77 (add)

16. Divide 32 sweets into 4 packets. How many sweets go in each packet? 8 $32 \div 4 =$

Thursday

1. 100 less than 450 = 350
$$\begin{array}{r} 450 \\ - 100 \\ \hline \end{array}$$

2. $78 -$ 24 $= 54$


3. $7 \times 6 =$ 42 groups
$$\begin{array}{r} 78 \\ - 54 \\ \hline \end{array}$$

4.
$$\begin{array}{r} \text{h t u} \\ 570 \\ - 367 \\ \hline \end{array}$$
 } Don't forget to borrow if needed.

5. $\frac{1}{4}$ of 8 = 2 $8 \div 4$ or $\frac{1}{2}$ of 8 and $\frac{1}{2}$ again.

6. $165\text{cm} =$ 1 m 65 cm $100\text{cm} = 1\text{m}$

7. What time is 10 minutes earlier than 3:55? 3:45 -go back


8. Draw an arrow pointing clockwise.  (Think of the way clock hands go.)

9. Divide 27 marbles among 3 girls. $27 \div 3 =$ 9 Share equally between.

10. 28, 25, 22, 19, 16, 13

11. Tick the most likely event.
 School will stay closed on Friday.
 It will get dark tonight.


12. Which fraction is larger, $\frac{5}{8}$ or $\frac{1}{4}$? 5/8 $\frac{1}{4} = \frac{2}{8}$

Pupils in Third Class want to buy a goat. There are 20 children in the class. $\frac{1}{2}$ of them are girls. 

13. Each boy sold €2.00 of raffle tickets. How much did they collect? 20 How many boys in the class first. Then $\times \text{€}2$

14. Each girl sold €3.00 of raffle tickets. How much did they collect? 30 How many girls first. a) $\frac{1}{2}$ of 20 b) $\times \text{€}3$

15. How much more do they need to buy the goat? 75 a) Boys money + Girls money

16.  The children decide to have a cake sale. How many cakes do they need to sell to buy the goat? 19 b) $\text{€}95.00 - \text{Ans. 15}$